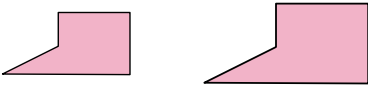




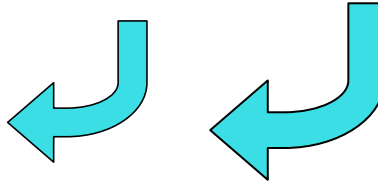
Determine if the shapes shown are 'similar', 'congruent' or 'neither'.

Answers

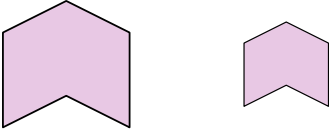
1)



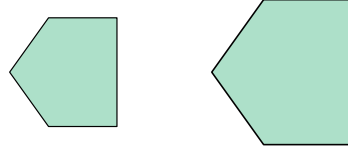
2)



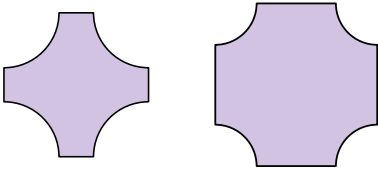
3)



4)



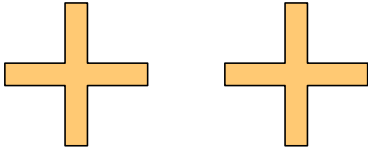
5)



6)



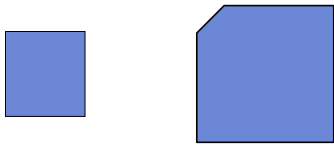
7)



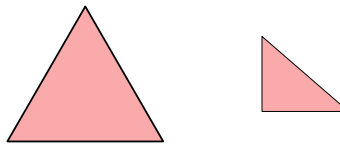
8)



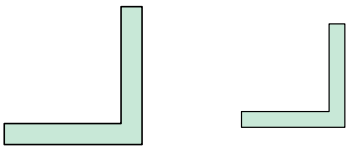
9)



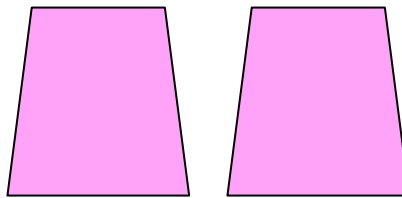
10)



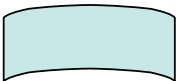
11)



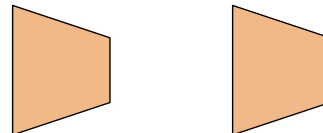
12)



13)



14)



15)



16)



1. _____

2. _____

3. _____

4. _____

5. _____

6. _____

7. _____

8. _____

9. _____

10. _____

11. _____

12. _____

13. _____

14. _____

15. _____

16. _____




Determine if the shapes shown are 'similar', 'congruent' or 'neither'.

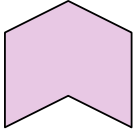
1)



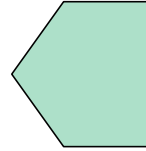
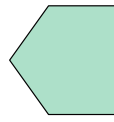
2)



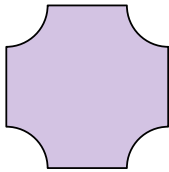
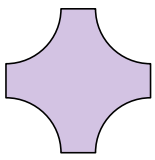
3)



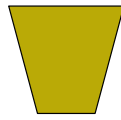
4)





5)



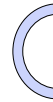
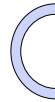
6)



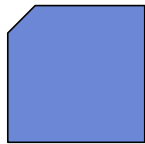
7)



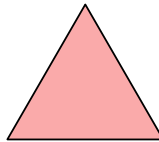
8)



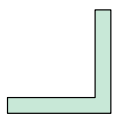
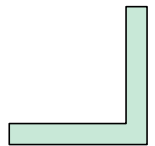
9)



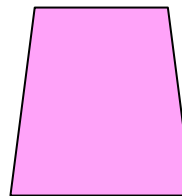
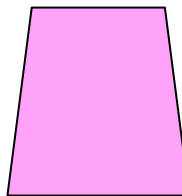
10)



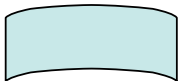
11)



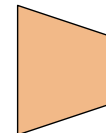
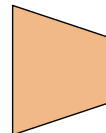
12)




13)



14)



15)



16)



Answers

1. similar

2. similar

3. similar

4. similar

5. neither

6. neither

7. congruent

8. congruent

9. neither

10. neither

11. similar

12. congruent

13. similar

14. congruent

15. similar

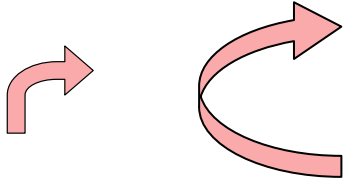
16. neither



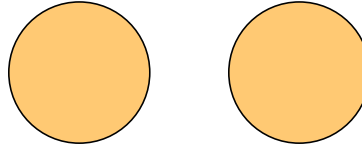
Determine if the shapes shown are 'similar', 'congruent' or 'neither'.

Answers

1)

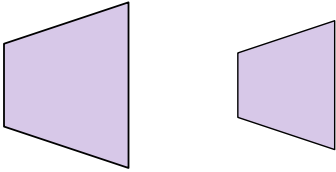


2)



1. _____

3)



4)

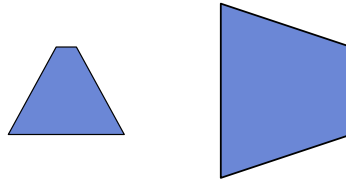


2. _____

5)

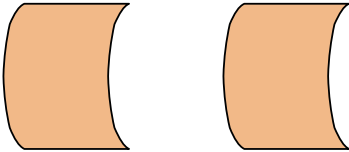


6)



3. _____

7)

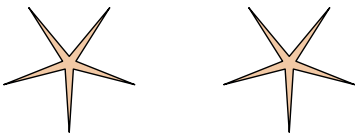


8)

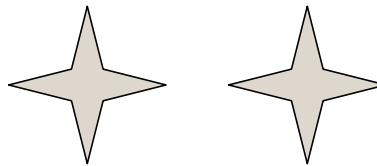


4. _____

9)

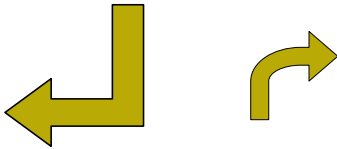


10)



5. _____

11)

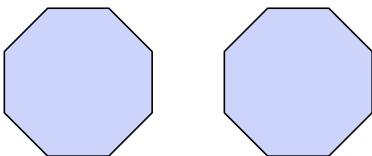


12)

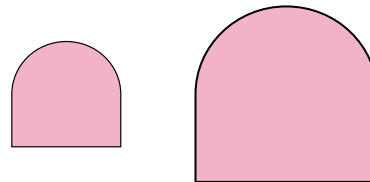


6. _____

13)

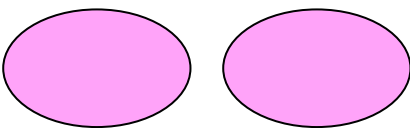


14)




7. _____

15)



16)



8. _____

9. _____

10. _____

11. _____

12. _____

13. _____

14. _____

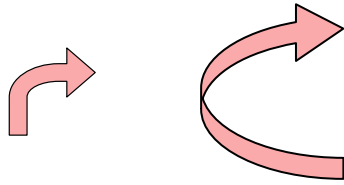
15. _____

16. _____

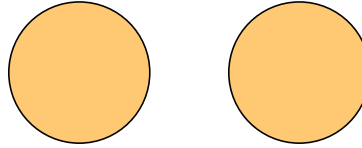


Determine if the shapes shown are 'similar', 'congruent' or 'neither'.

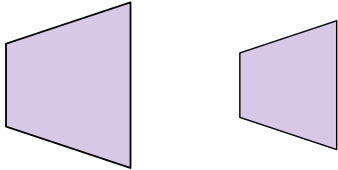
1)



2)



3)



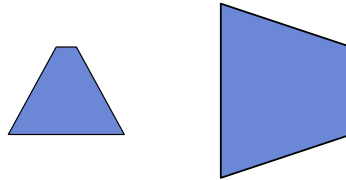
4)



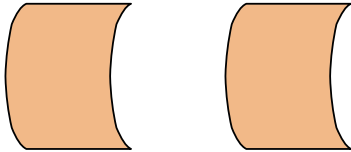
5)



6)




7)



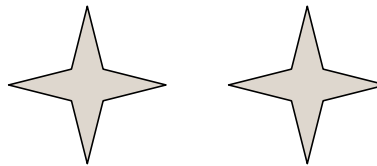
8)



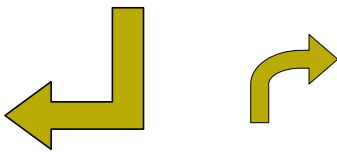
9)



10)



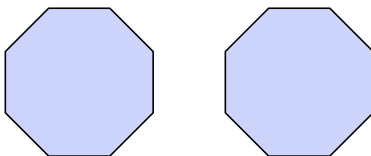
11)



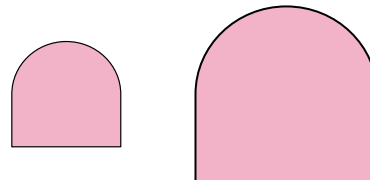
12)



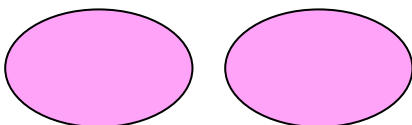
13)




14)



15)



16)



Answers

1. neither

2. congruent

3. similar

4. neither

5. congruent

6. neither

7. congruent

8. similar

9. congruent

10. congruent

11. neither

12. neither

13. congruent

14. similar


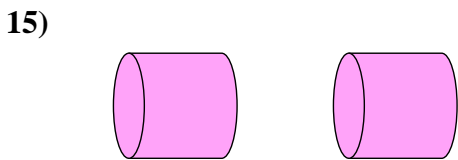
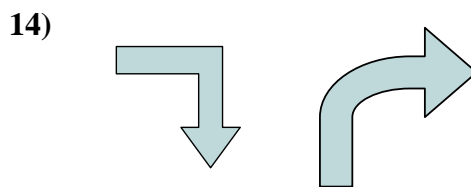
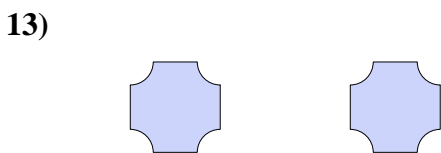
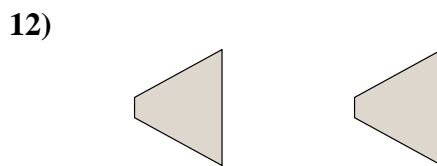
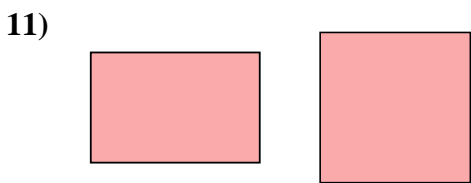
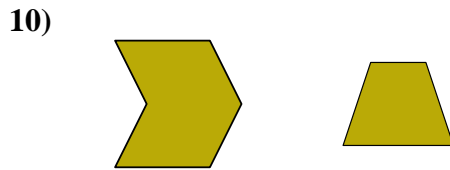
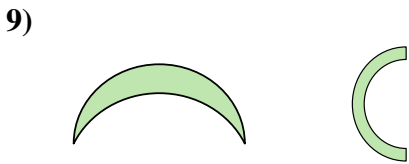
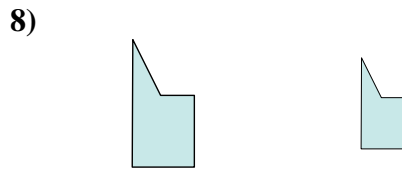
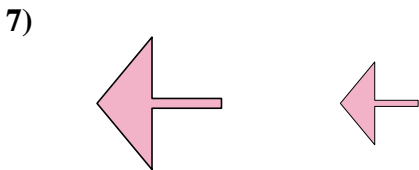
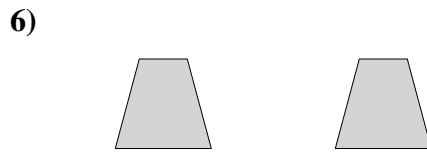

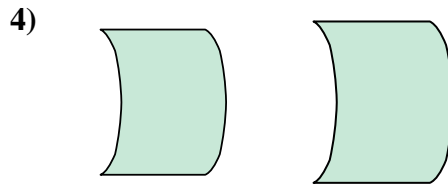
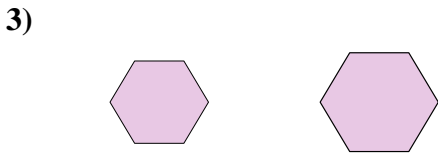
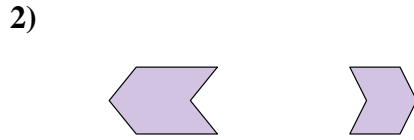
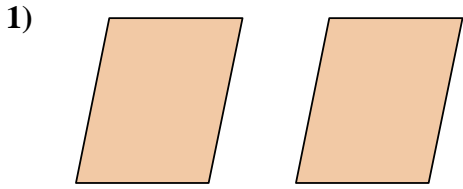
15. congruent

16. similar



Determine if the shapes shown are 'similar', 'congruent' or 'neither'.



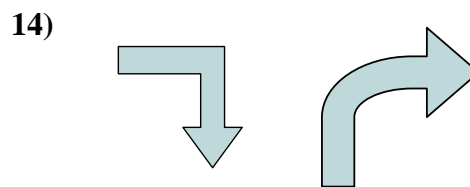
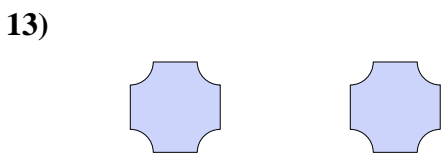
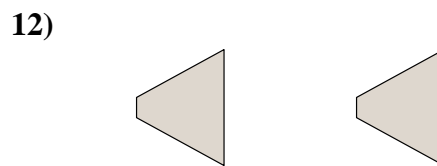
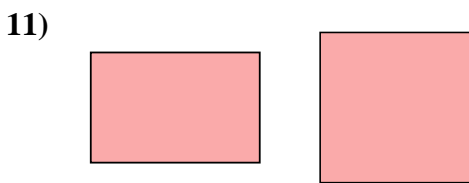
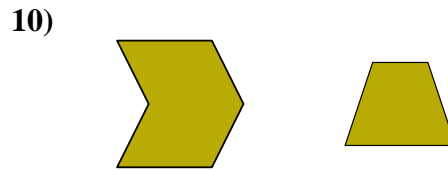
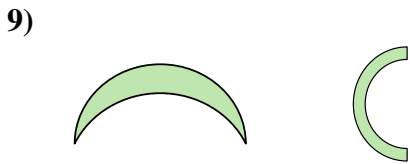
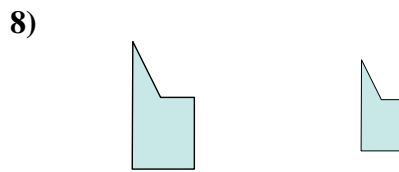
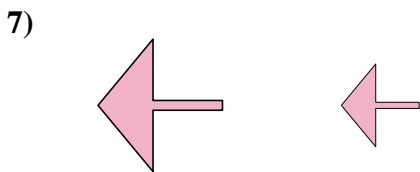
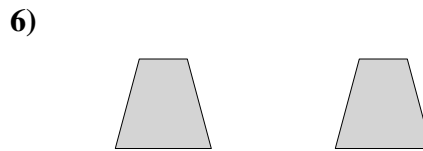

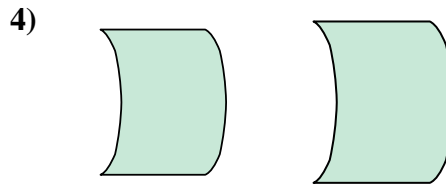
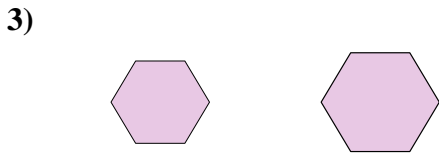
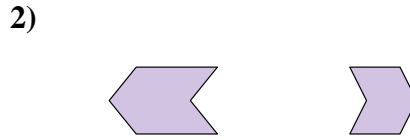
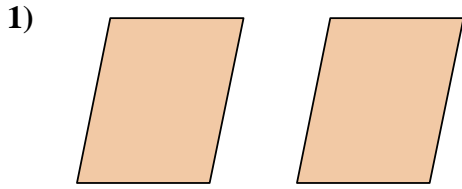
Answers



1. _____
2. _____
3. _____
4. _____
5. _____
6. _____
7. _____
8. _____
9. _____
10. _____
11. _____
12. _____
13. _____
14. _____
15. _____
16. _____



Determine if the shapes shown are 'similar', 'congruent' or 'neither'.



Answers

1. congruent

2. neither

3. similar

4. similar

5. similar

6. congruent

7. similar

8. similar

9. neither

10. neither

11. neither

12. congruent

13. congruent

14. neither

15. congruent

16. neither



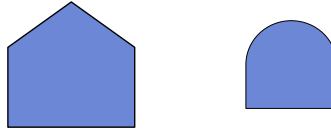
Determine if the shapes shown are 'similar', 'congruent' or 'neither'.

Answers

1)



2)



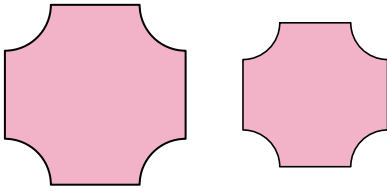
3)



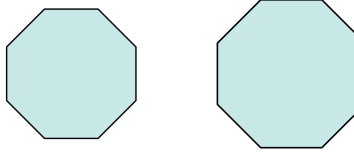
4)




5)



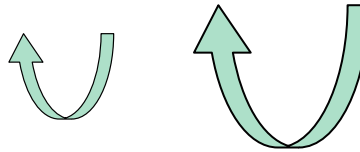
6)



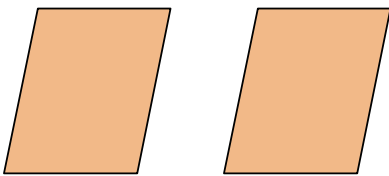
7)



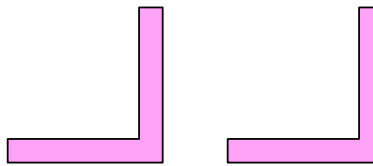
8)




9)



10)



11)



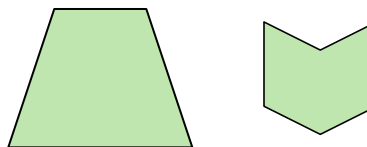
12)



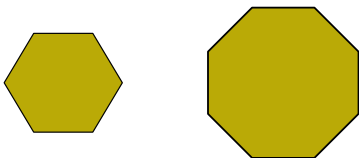
13)



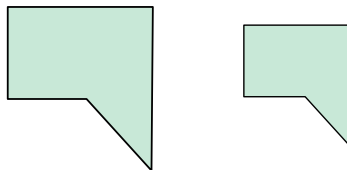
14)



15)



16)



1. _____

2. _____

3. _____

4. _____

5. _____

6. _____

7. _____

8. _____

9. _____

10. _____

11. _____

12. _____

13. _____

14. _____

15. _____

16. _____

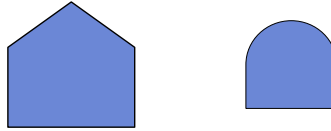


Determine if the shapes shown are 'similar', 'congruent' or 'neither'.

1)



2)



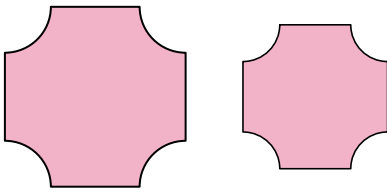
3)



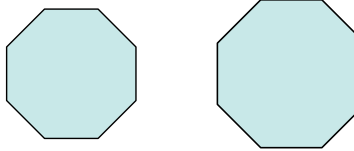
4)




5)



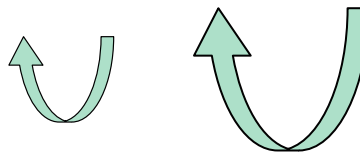
6)



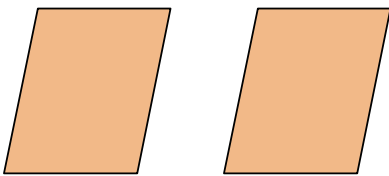
7)



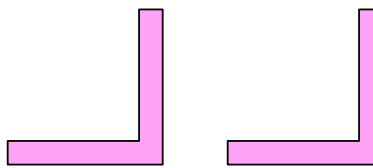
8)




9)




10)



11)



12)



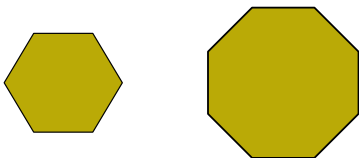
13)



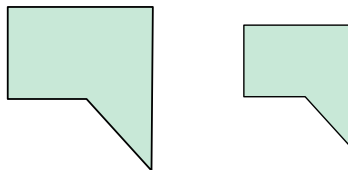
14)



15)



16)



Answers

1. congruent

2. neither

3. congruent

4. similar

5. similar

6. similar

7. similar

8. similar

9. congruent

10. congruent

11. congruent

12. neither

13. congruent

14. neither

15. neither

16. similar



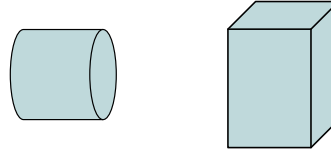
Determine if the shapes shown are 'similar', 'congruent' or 'neither'.

Answers

1)



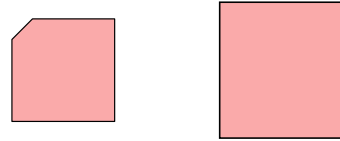
2)



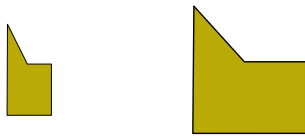
3)




4)



5)



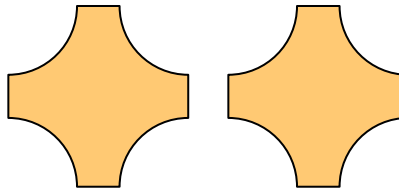
6)



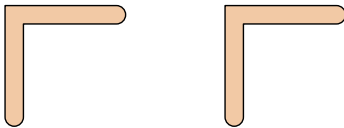
7)



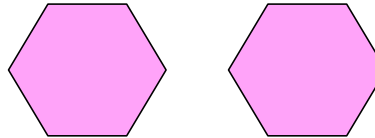
8)



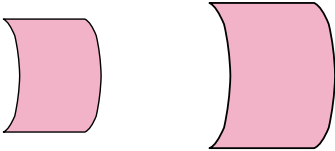
9)



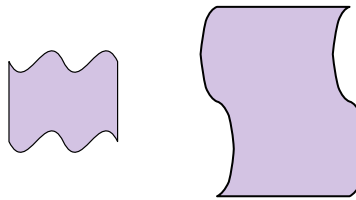
10)



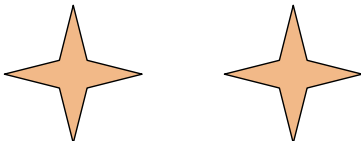
11)



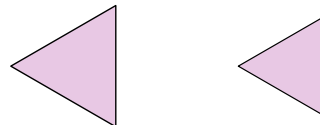
12)



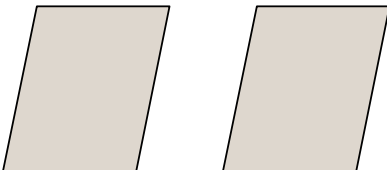
13)



14)



15)



16)



1. _____
2. _____
3. _____
4. _____
5. _____
6. _____
7. _____
8. _____
9. _____
10. _____
11. _____
12. _____
13. _____
14. _____
15. _____
16. _____

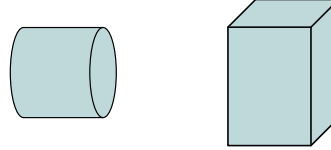


Determine if the shapes shown are 'similar', 'congruent' or 'neither'.

1)



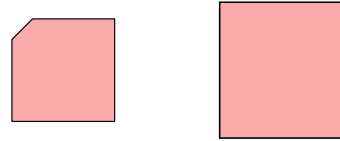
2)



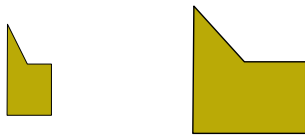
3)




4)



5)



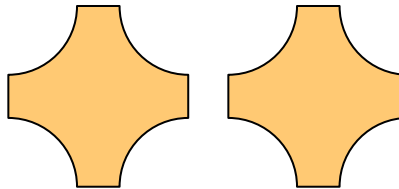
6)



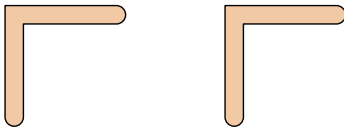
7)



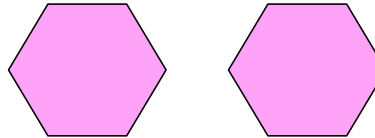
8)



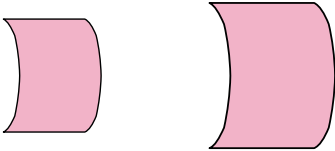
9)



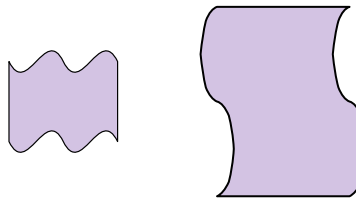
10)



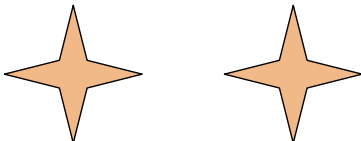
11)



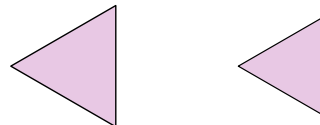
12)



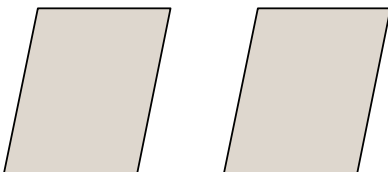
13)



14)



15)



16)



Answers

1. similar

2. neither

3. similar

4. neither

5. neither

6. congruent

7. similar

8. congruent

9. congruent

10. congruent

11. similar

12. neither

13. congruent

14. similar

15. congruent

16. neither



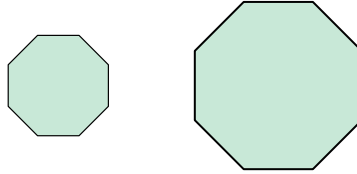
Determine if the shapes shown are 'similar', 'congruent' or 'neither'.

Answers

1)

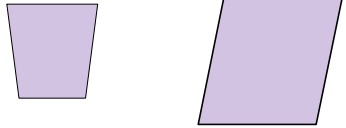


2)



1. _____

3)



4)

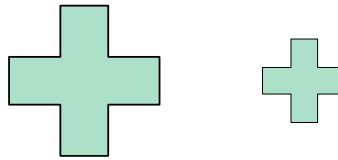


2. _____

5)

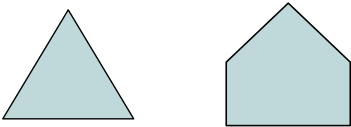


6)

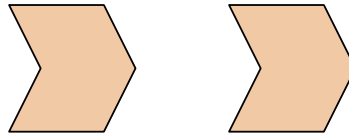


3. _____

7)

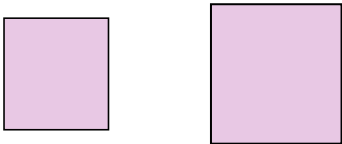


8)

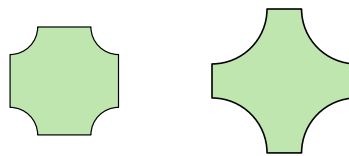


4. _____

9)

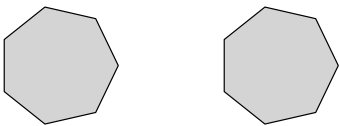


10)




5. _____

11)

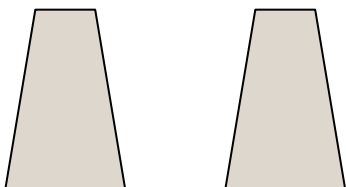


12)

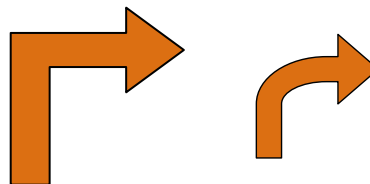


6. _____

13)



14)

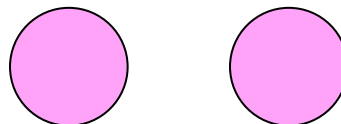


7. _____

15)



16)



8. _____

9. _____

10. _____

11. _____

12. _____

13. _____

14. _____


15. _____

16. _____

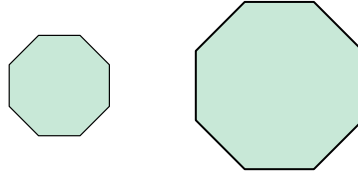


Determine if the shapes shown are 'similar', 'congruent' or 'neither'.

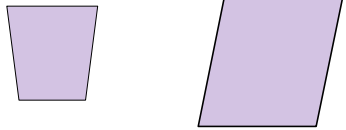
1)



2)



3)



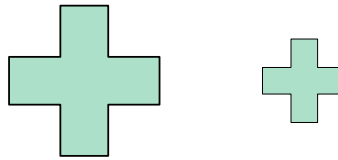
4)



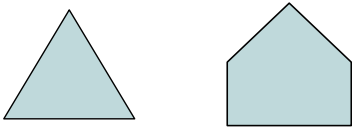
5)



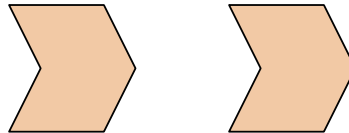
6)



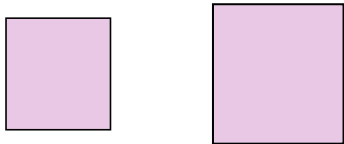
7)



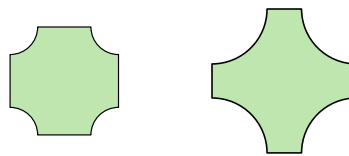
8)



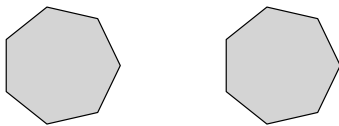
9)




10)



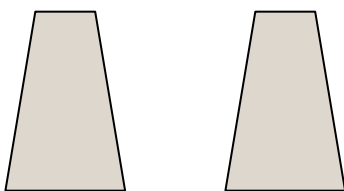
11)



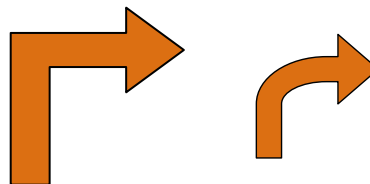
12)



13)



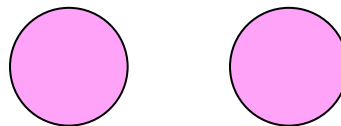
14)



15)



16)



Answers

1. neither

2. similar

3. neither

4. similar

5. similar

6. similar

7. neither

8. congruent

9. similar

10. neither

11. congruent

12. neither

13. congruent

14. neither

15. congruent

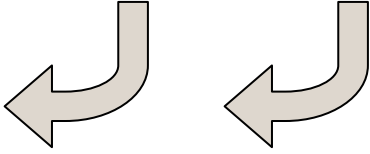
16. congruent



Determine if the shapes shown are 'similar', 'congruent' or 'neither'.

Answers

1)

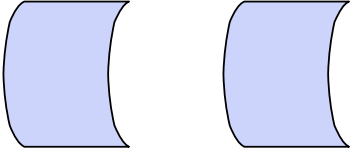


2)



1. _____

3)




4)

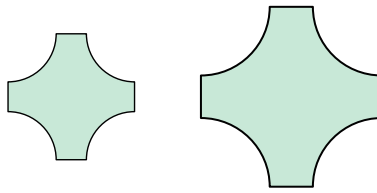


2. _____

5)



6)




3. _____

7)

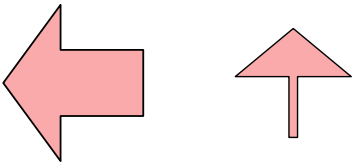


8)



4. _____

9)

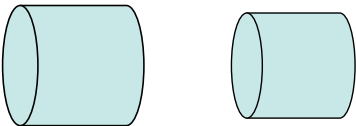


10)

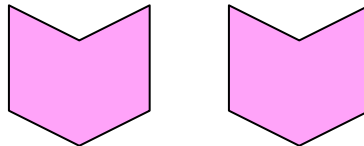


5. _____

11)

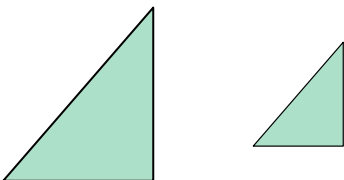


12)



6. _____

13)

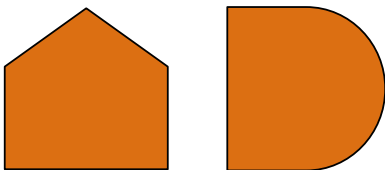


14)

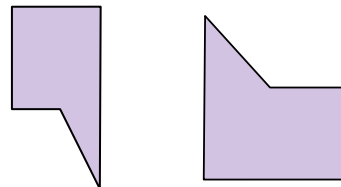


7. _____

15)



16)



8. _____

9. _____

10. _____

11. _____

12. _____

13. _____

14. _____

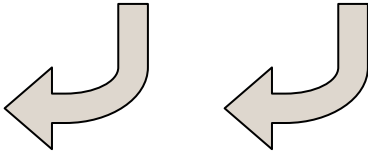
15. _____

16. _____




Determine if the shapes shown are 'similar', 'congruent' or 'neither'.

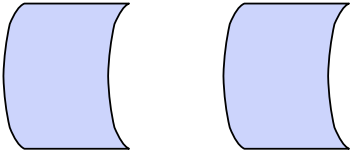
1)




2)



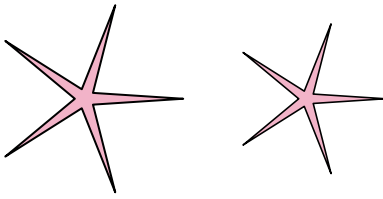
3)



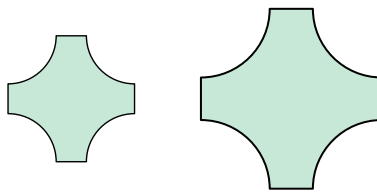
4)



5)




6)



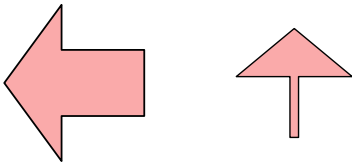
7)



8)



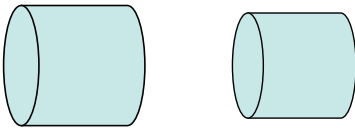
9)



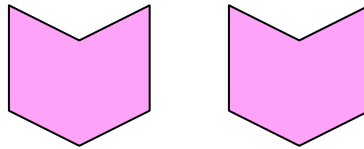
10)



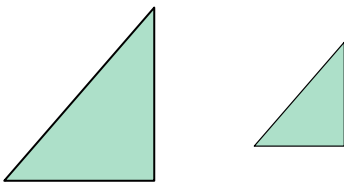
11)



12)



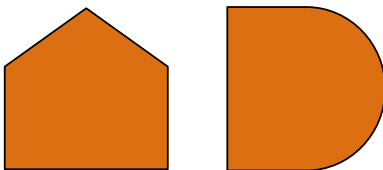
13)



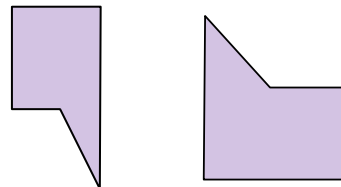
14)



15)



16)



Answers

1. congruent

2. congruent

3. congruent

4. congruent

5. similar

6. similar

7. neither

8. similar

9. neither

10. neither

11. similar

12. congruent

13. similar

14. congruent



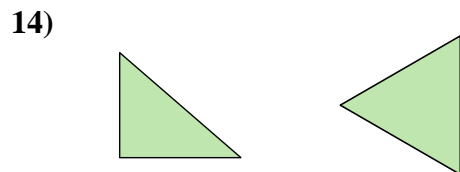
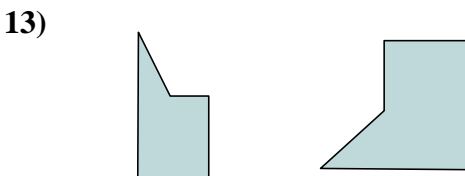
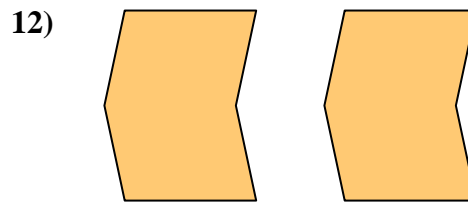
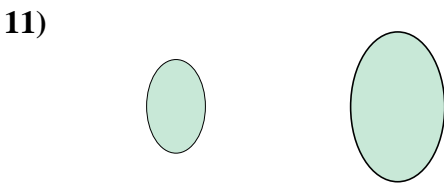
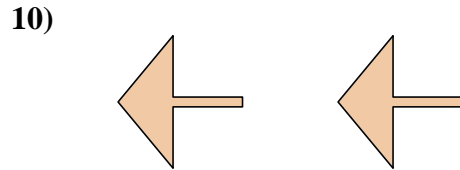
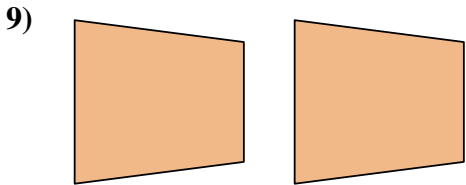
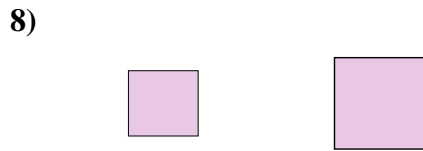
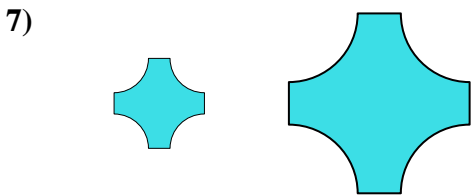
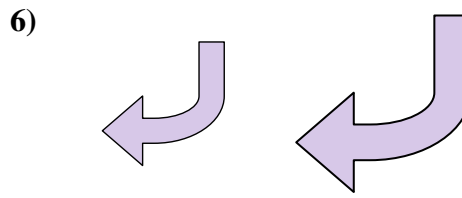
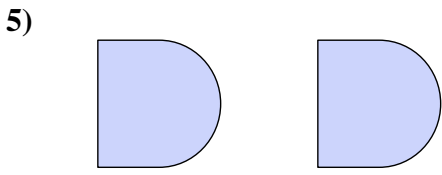

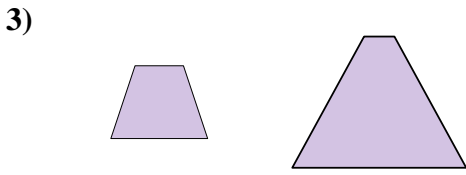
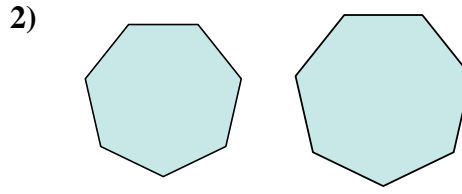
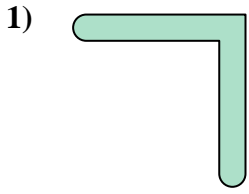
15. neither

16. neither



Determine if the shapes shown are 'similar', 'congruent' or 'neither'.



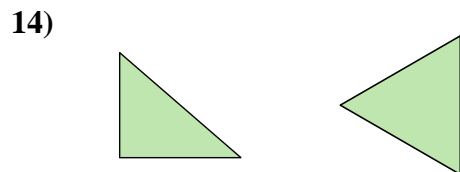
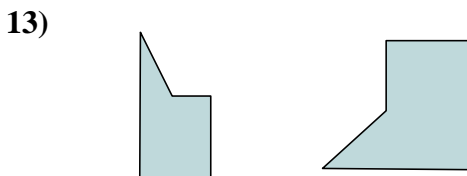
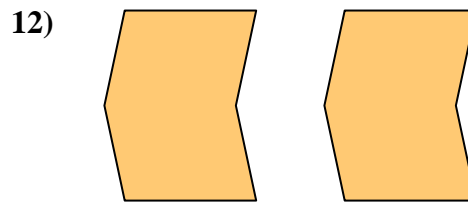
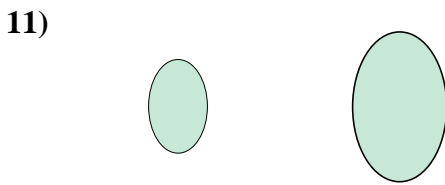
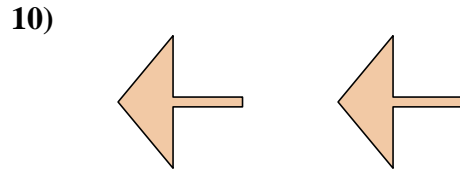
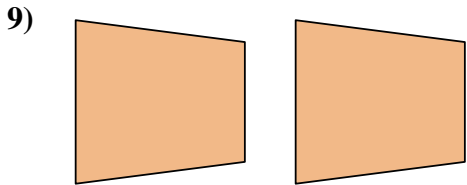
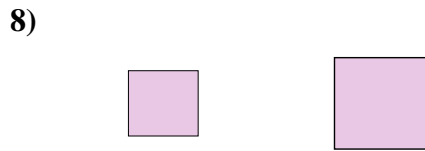
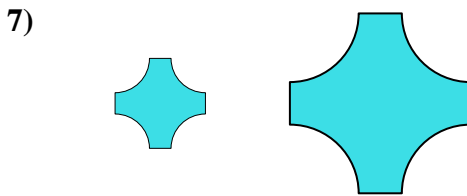
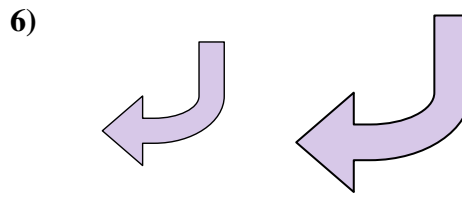
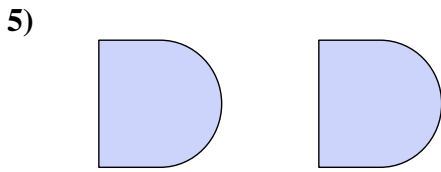

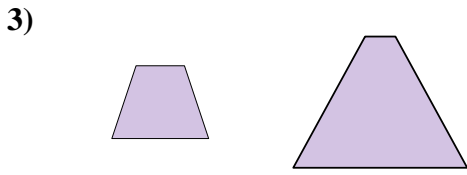
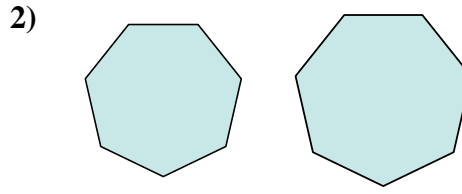
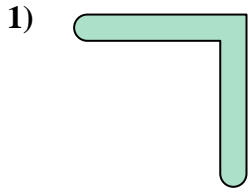
Answers



1. _____
2. _____
3. _____
4. _____
5. _____
6. _____
7. _____
8. _____
9. _____
10. _____
11. _____
12. _____
13. _____
14. _____
15. _____
16. _____



Determine if the shapes shown are 'similar', 'congruent' or 'neither'.



Answers

1. similar

2. similar

3. neither

4. neither

5. congruent

6. similar

7. similar

8. similar

9. congruent

10. congruent

11. similar

12. congruent

13. neither

14. neither

15. neither

16. neither



Determine if the shapes shown are 'similar', 'congruent' or 'neither'.

Answers

1)



2)

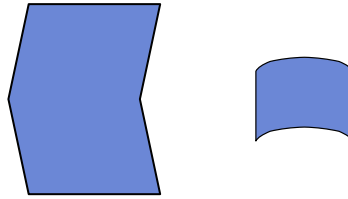


1. _____

3)

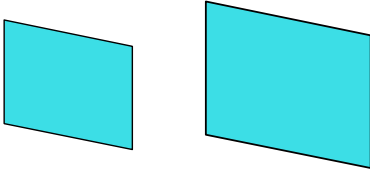


4)




2. _____

5)

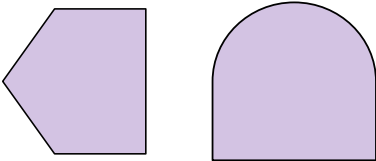


6)

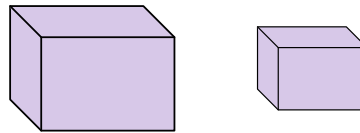


3. _____

7)

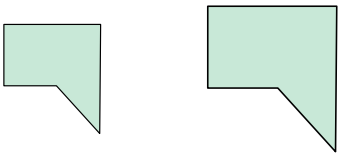


8)



4. _____

9)

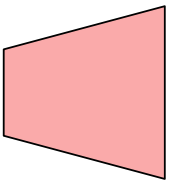


10)




5. _____

11)

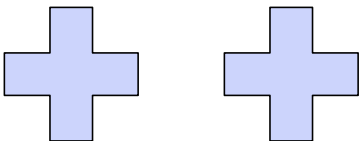


12)



6. _____

13)



14)

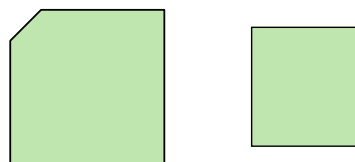


7. _____

15)



16)



8. _____

9. _____

10. _____

11. _____

12. _____

13. _____

14. _____

15. _____

16. _____



Determine if the shapes shown are 'similar', 'congruent' or 'neither'.

1)



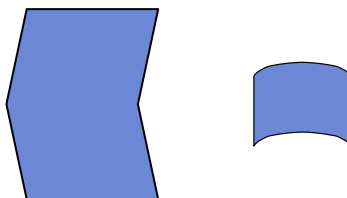
2)



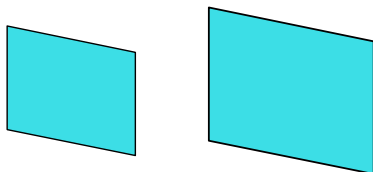
3)



4)



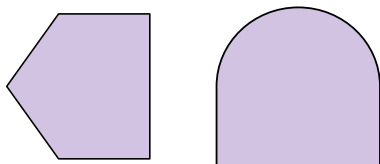
5)



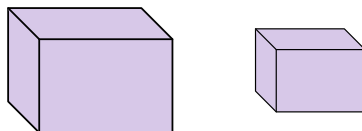
6)



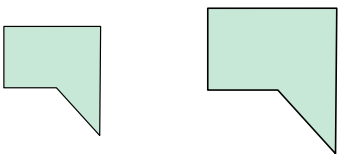
7)



8)



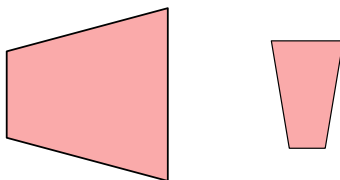
9)




10)



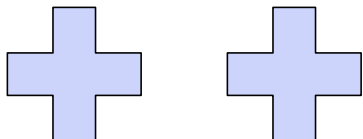
11)



12)



13)



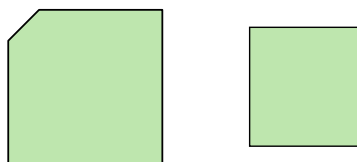
14)



15)



16)



Answers

1. similar

2. congruent

3. congruent

4. neither

5. similar

6. congruent

7. neither

8. similar

9. similar

10. congruent

11. neither

12. neither

13. congruent

14. congruent


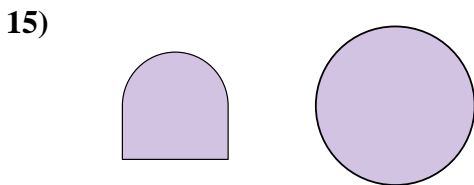



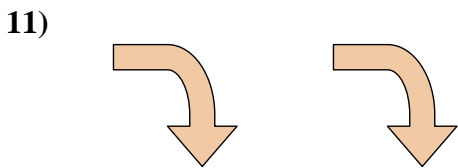
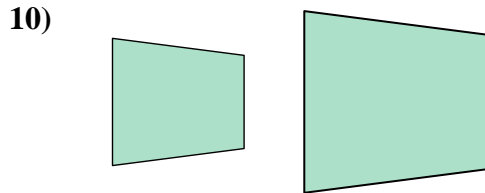
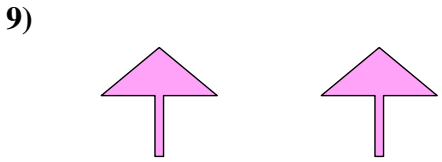

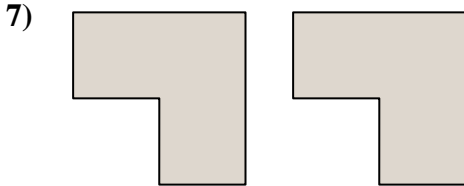
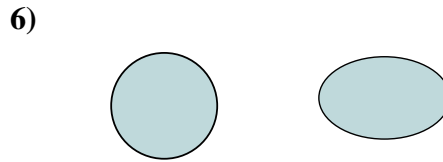

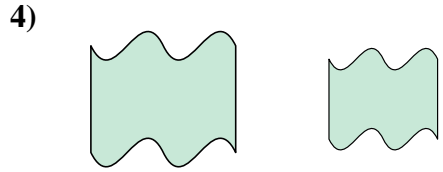

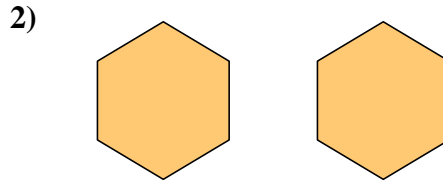
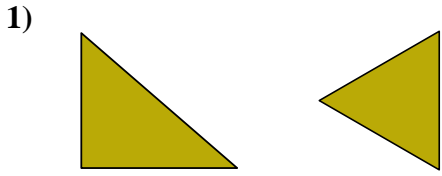
15. similar

16. neither



Determine if the shapes shown are 'similar', 'congruent' or 'neither'.


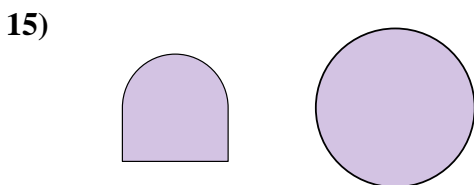

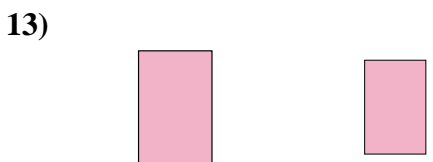

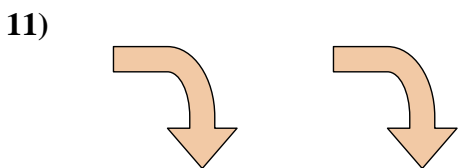
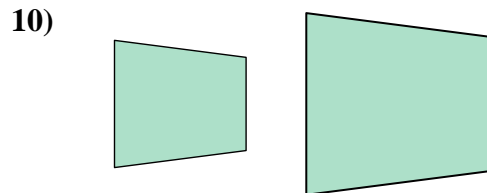
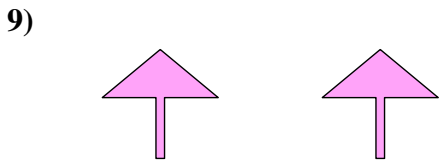

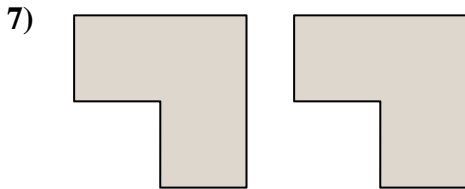
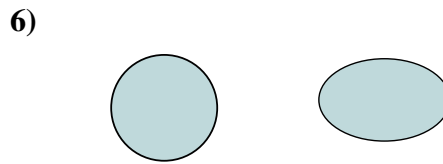

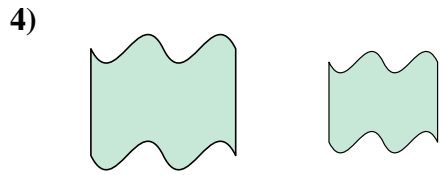

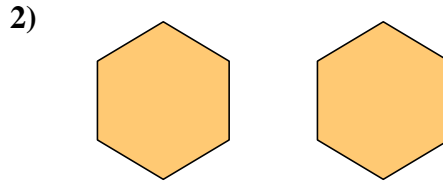
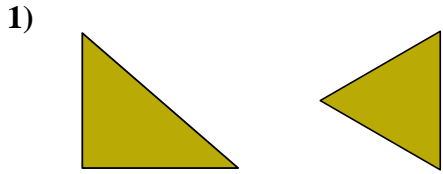
Answers



1. _____
2. _____
3. _____
4. _____
5. _____
6. _____
7. _____
8. _____
9. _____
10. _____
11. _____
12. _____
13. _____
14. _____
15. _____
16. _____



Determine if the shapes shown are 'similar', 'congruent' or 'neither'.



Answers

1. neither

2. congruent

3. neither

4. similar

5. similar

6. neither

7. congruent

8. neither

9. congruent

10. similar

11. congruent

12. similar

13. similar

14. similar

15. neither

16. similar